

Nid Question Papers

*Free Download Material by
Mosaic Institute of Design*

MOSAIC - INDIA'S NO. 1 IN NID PREPARATIONS



NID BOOKS

*printed study material,
doorstep delivery across
india*

NID E-BOOKS

*instant downloads,
saves delivery time,
light on your pocket*



NID VIDEOS

*24X7 access,
pause-rewind-relearn,
study anywhere-anytime*

NID ONLINE TEST

*test your preparations,
instant results,
detailed answer key*



MORE TO EXPLORE

NID EXAMS

*admissions, pattern, date,
schedule, details*

NID FORMS

*fees, admit card, important
dates, test centres*

NID SYLLABUS

*exam pattern,
course content*

NID ELIGIBILITY

*admission criteria,
qualification*

NID STUDY MATERIAL

*full, combo, mini, instant,
test series pack*

NID VIDEO COACHING

*narrations, illustrations
rich animations,*

ABOUT NID

*about exam, website,
contact info*

NID CRASH COURSES

*schedule, duration,
contents, details*



IF YOU ARE UNABLE TO WATCH THE VIDEO BELOW

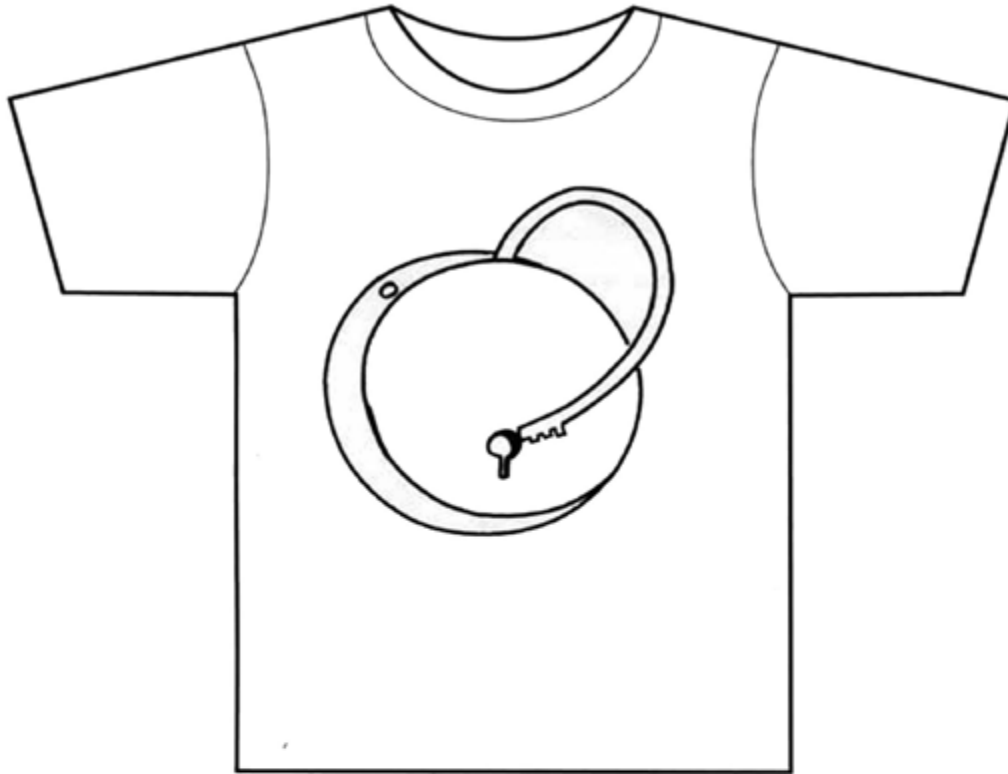
CLICK HERE!



NID
2018
*Dat Question
With Solution*



NID 2011 - 2012



Q3B. Carefully look at the images of four absurd locks. Each of these image illustrate a thought. Out of given five thoughts, **two are most appropriate** as statement. **Mark (√) these two.**

[08 marks]



- a) ...don't worry everything is cool!
- b) ...actually, its burdensome and delaying.
- c) ...keep searching for a right solution!
- d) ...oh! Its contemporary!
- e) ...its rather outdated.



- a) ...I struggle...you struggle!
- b) ...its melting
- c) ...a theft has taken place
- d) ...a sleeping system.
- e) ...a hopeless security system!



- a) ...Oh...its fussy!
- b) ...too smooth system
- c) ...oh, its fake and dysfunctional
- d) ...too easy to lock
- e) ...a playful security system



- a) ...the frustrated two!
- b) ...a spinning lock
- c) ...in search of a system
- d) ...good only to be hanged
- e) ...a dancing hook!

Q4A. Observe the pairs of objects given below. Write down the most appropriate word/phrase in the space given which best describes the following.

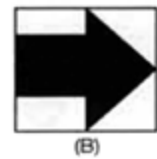

[05 marks]



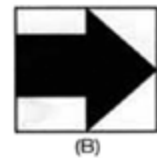

Q4B. Given below is a pattern of nine squares with one missing square. From the options given below, circle the most appropriate option. In the space provided below, write the logic behind the selected answer. [2x2.5=05 marks]



Given below is a random sequence of 6 squares.



Redraw, the correct sequence of the squares in the right orientation between (A) and (B).



Disclaimer: The paper given above contains only a part of the full test. The questions are shared for the students' community in the larger public interest, which should be used for reference only. The number of questions & paper style of exam may vary from year to year. For latest updates regarding the test please visit the respective websites that authenticate the information to check for any such changes taking place.

Mosaic

Institute Of Design



*71, Sardar Centre,
Vastrapur, Ahmedabad
9033082625, 9824083847
www.mosaicdesigns.in*